

Find the total

1 Annie wants to buy some new toys.




a) How much does it cost to buy the teddy and the yoyo?

b) How much does it cost to buy the toy train and the football?

c) How much does it cost to buy one of everything?

d) Annie has £9
Circle three items she could buy.
Compare answers with a partner.

2 Whitney goes to the cinema and buys these sweets.



How much money does Whitney spend altogether?

3 Complete the statements.

a) $£3 + 42p = £$ and p

b) $£7 +$ $p = £7 \text{ and } 96p$



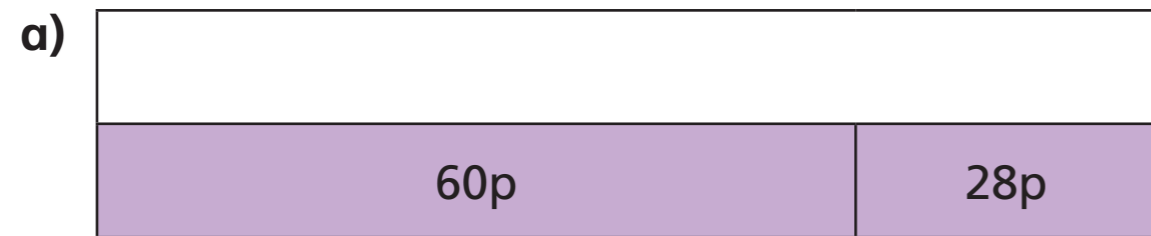
c) $£$ $+ 3p = £11 \text{ and }$ p

d) $£$ $\text{ and } 53p = 50p + 3p + £18$

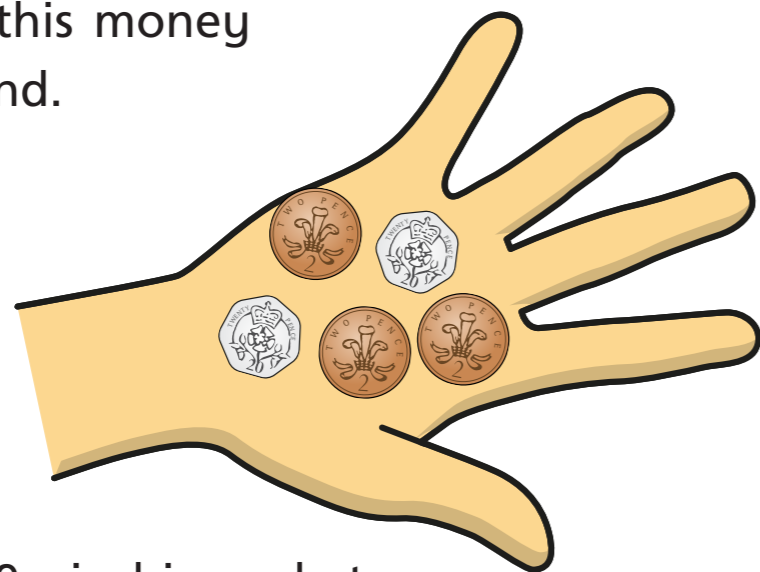
e) $£10 +$ $p + 50p = £10 \text{ and } 70p$



4 Complete the bar models.



5 Ron has this money in his hand.



He has 29p in his pocket.

How much money does Ron have altogether?

6 Dexter, Tommy, Alex and Rosie are going shopping.



a) Dexter buys a comic book and a chocolate bar.

How much does Dexter spend?

b) Tommy buys a bottle of water, a lollipop and an apple.

How much does Tommy spend?

c) Alex buys 2 lollipops and a box of crayons.

How much does Alex spend?

£ and p

d) Rosie spends £3 and 80p

What items could Rosie have bought?

Compare answers with a partner.

