

Find the total

1 Annie wants to buy some new toys.



a) How much does it cost to buy the teddy and the yoyo?

£6

b) How much does it cost to buy the toy train and the football?

£4

c) How much does it cost to buy one of everything?

£10

d) Annie has £9

Circle three items she could buy.

Compare answers with a partner.



2 Whitney goes to the cinema and buys these sweets.



How much money does Whitney spend altogether?

88p

3 Complete the statements.

a) $£3 + 42p = £$ and p

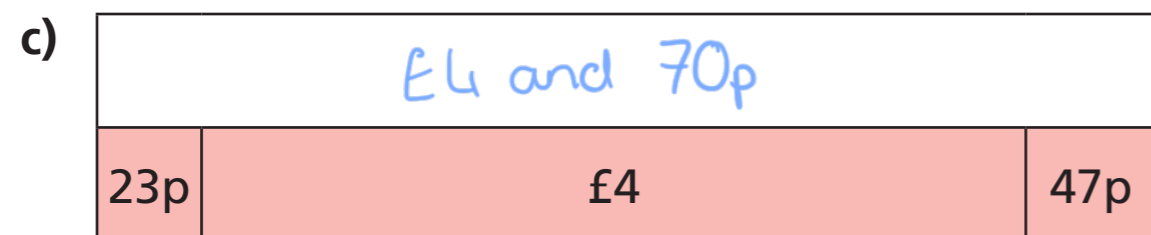
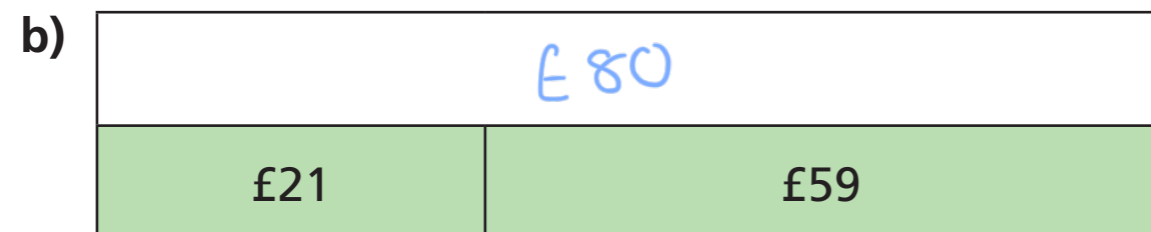
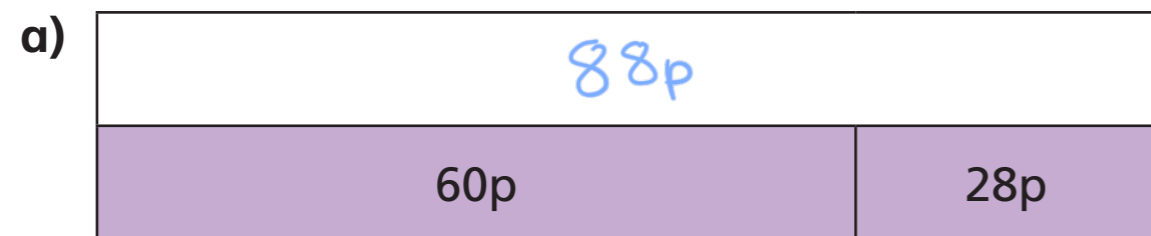
b) $£7 +$ p = £7 and 96p

c) $£$ + 3p = £11 and p

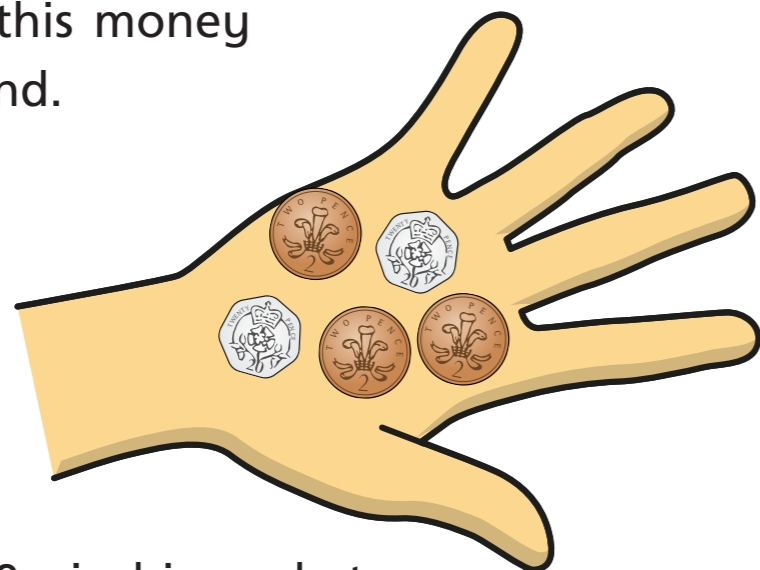
d) $£$ and 53p = 50p + 3p + £18

e) $£10 +$ p + 50p = £10 and 70p

4 Complete the bar models.



5 Ron has this money in his hand.



He has 29p in his pocket.

How much money does Ron have altogether?

75p

6 Dexter, Tommy, Alex and Rosie are going shopping.



a) Dexter buys a comic book and a chocolate bar.

How much does Dexter spend?

£3

b) Tommy buys a bottle of water, a lollipop and an apple.

How much does Tommy spend?

91p

c) Alex buys 2 lollipops and a box of crayons.

How much does Alex spend?

£ 3 and 22 p

d) Rosie spends £3 and 80p

What items could Rosie have bought?

Crayons, water & apple

Compare answers with a partner.

