

# Counting in coins



I How much money is there?

a)

1 p	2 p	3 p	4 p

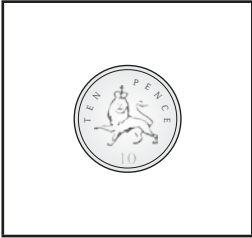
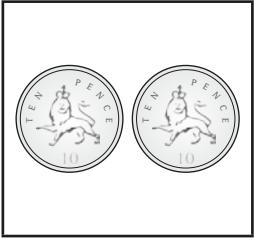


b)

2 p	4 p	6 p	8 p

c)


5 p	10 p	15 p	20 p

d)

			
10 p	20 p	30 p	40 p

**2** How much money is there?

a)

	5 p
---	-----

b)



	30 p
---	------

c)

	14 p
--	------

**3** Write  $<$ ,  $>$  or  $=$  to compare the amounts.

a)

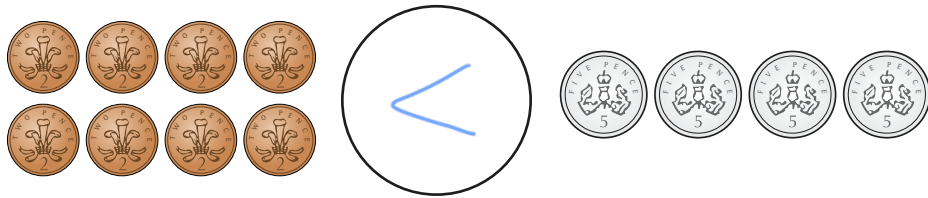
	$>$	
---	-----	--

b)

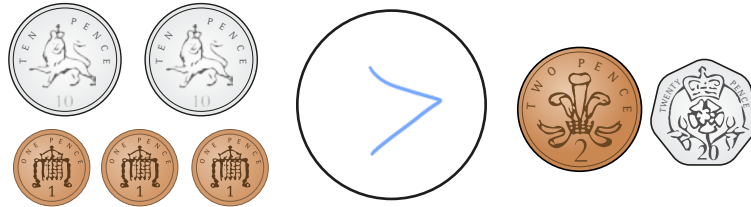
	$=$	
---	-----	--




c)



d)



4 Sam has some 2p coins.




I have 11 pence.

Do you agree with Sam? No

Talk about your answer.

5 Ron has nine 2p coins.

Jo has three silver coins.



I must have more money because I have more coins.

Ron

Do you agree with Ron? No

Talk about your answer.