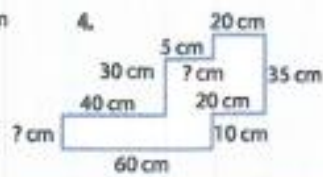
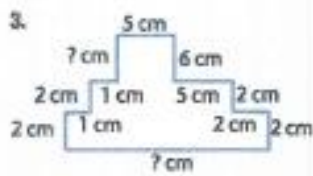
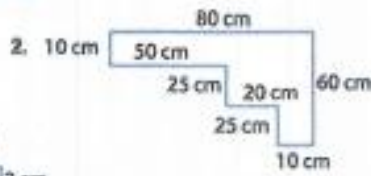
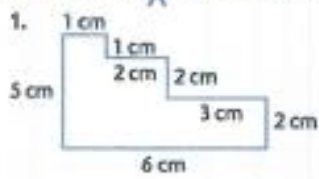


Gold

and perimeter

a) Find the area of these shapes:



b) Without using a calculator, find the total surface area of these cuboids. Remember each has 6 faces!

