


Written Addition

1


Calculate $425 + 134$.



1 mark

2


Ellen has £236. She is given £250. How much does she have now?

 £

1 mark

3

What number is forty seven more than one hundred and eighty six?



1 mark

4


Georgina measures the heights of 2 sunflowers.

Flower A




Height: 79 cm


Flower B



Height: 128 cm

After 2 weeks, both flowers have grown 18 cm taller.
Calculate the heights of the sunflowers now.

Flower A  cm

Flower B  cm

2 marks

"I can add numbers with up to 3 digits using a written method."

