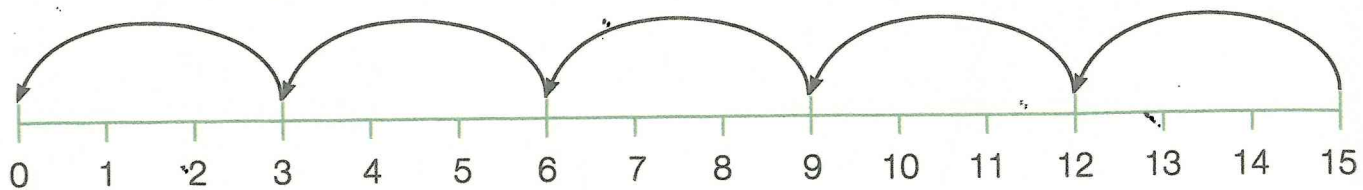


Multiplication and division

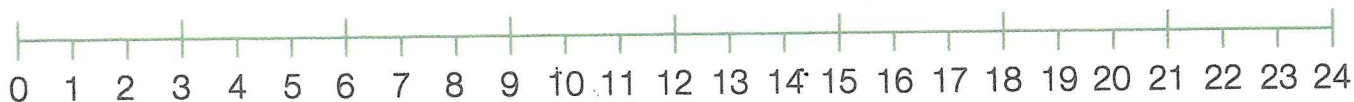
Division hops

This number line helps us solve the division question $15 \div 5$.
There are 5 jumps of 3, so $15 \div 5 = 3$.



1. Use the number lines to help you to solve these division questions.

a. $24 \div 3 =$



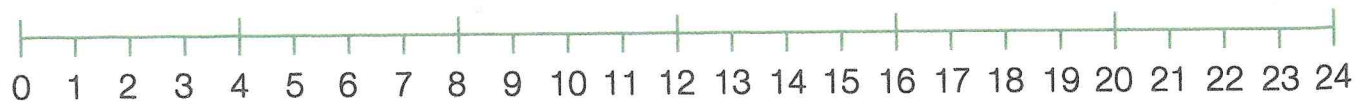
b. $30 \div 5 =$



c. $14 \div 2 =$



d. $24 \div 4 =$



e. $30 \div 10 =$

