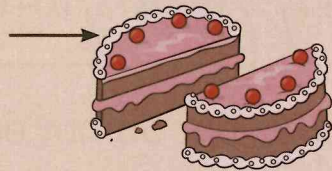


# Halves and quarters

A half shows one of two equal parts.

This arrow is pointing to half a cake.




Half of these candles are red.




A quarter is one of four equal parts.

This arrow is pointing to a quarter of a sandwich.

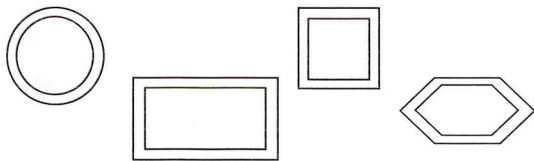


A quarter of these balloons are round.

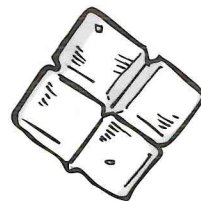


## 1 Look at these shapes.

a Colour half of each plate.



b Colour a quarter of this bar.



## 2 Look at these groups.

a Draw a loop around half of these stars.



b Draw a loop around a quarter of these moons.

